

Prénom :

Les compléments à 20

1

3



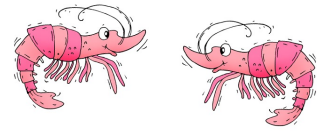
2

4



6

5



Complète.

$$\underline{\hspace{2cm}} + 16 = 20$$

$$\underline{\hspace{2cm}} + 10 = 20$$

$$\underline{\hspace{2cm}} + 17 = 20$$

$$\underline{\hspace{2cm}} + 19 = 20$$

$$\underline{\hspace{2cm}} + 12 = 20$$

$$\underline{\hspace{2cm}} + 15 = 20$$



$$\underline{\hspace{2cm}} + 20 = 20$$

$$\underline{\hspace{2cm}} + 18 = 20$$

$$\underline{\hspace{2cm}} + 11 = 20$$

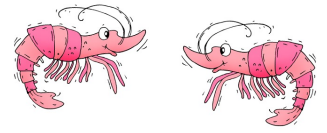
$$\underline{\hspace{2cm}} + 12 = 20$$

$$\underline{\hspace{2cm}} + 14 = 20$$

$$\underline{\hspace{2cm}} + 17 = 20$$

$$\underline{\hspace{2cm}} + 13 = 20$$

$$\underline{\hspace{2cm}} + 10 = 20$$



Complète.

$$2 + \underline{\quad\quad} = 20$$

$$0 + \underline{\quad\quad} = 20$$

$$9 + \underline{\quad\quad} = 20$$

$$4 + \underline{\quad\quad} = 20$$

$$5 + \underline{\quad\quad} = 20$$

$$10 + \underline{\quad\quad} = 20$$

$$3 + \underline{\quad\quad} = 20$$

$$6 + \underline{\quad\quad} = 20$$



$$8 + \underline{\quad\quad} = 20$$

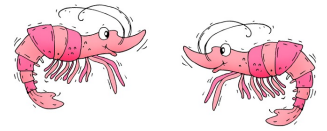
$$2 + \underline{\quad\quad} = 20$$

$$1 + \underline{\quad\quad} = 20$$

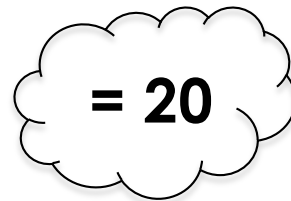

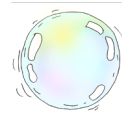



$$6 + \underline{\quad\quad} = 20$$

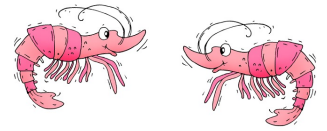
$$7 + \underline{\quad\quad} = 20$$

$$5 + \underline{\quad\quad} = 20$$



Colorie les bulles dont la réponse est 20.





Choisis deux nombres dans la ligne pour faire 20.

Exemple :

8 11 7 13 14

$$7 + 13 = 20$$

9 11 6 10 12

$$\dots + \dots = 20$$

6 10 9 14 7

$$\dots + \dots = 20$$

9 20 6 0 19

$$\dots + \dots = 20$$

5 13 15 17 8

$$\dots + \dots = 20$$

6 13 11 14 3

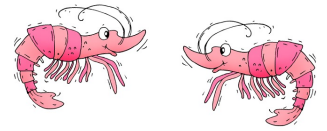
$$\dots + \dots = 20$$

12 10 8 14 9

$$\dots + \dots = 20$$

9 17 6 3 12

$$\dots + \dots = 20$$



Entoure les additions dont la réponse est 20.

$14 + 4$

$13 + 7$

$20 + 0$

$12 + 7$

$8 + 12$

$9 + 13$

$3 + 17$

$5 + 16$

$15 + 5$

$3 + 14$

$7 + 14$

$7 + 13$

$10 + 12$

$2 + 18$

$19 + 1$

$14 + 6$

Complète les calculs.

$18 + \dots = 20$

$\dots + 11 = 20$

$14 + \dots = 20$

$\dots + 13 = 20$

$15 + \dots = 20$

$2 + \dots = 20$

$\dots + 0 = 20$

$7 + \dots = 20$

$\dots + 6 = 20$

$9 + \dots = 20$

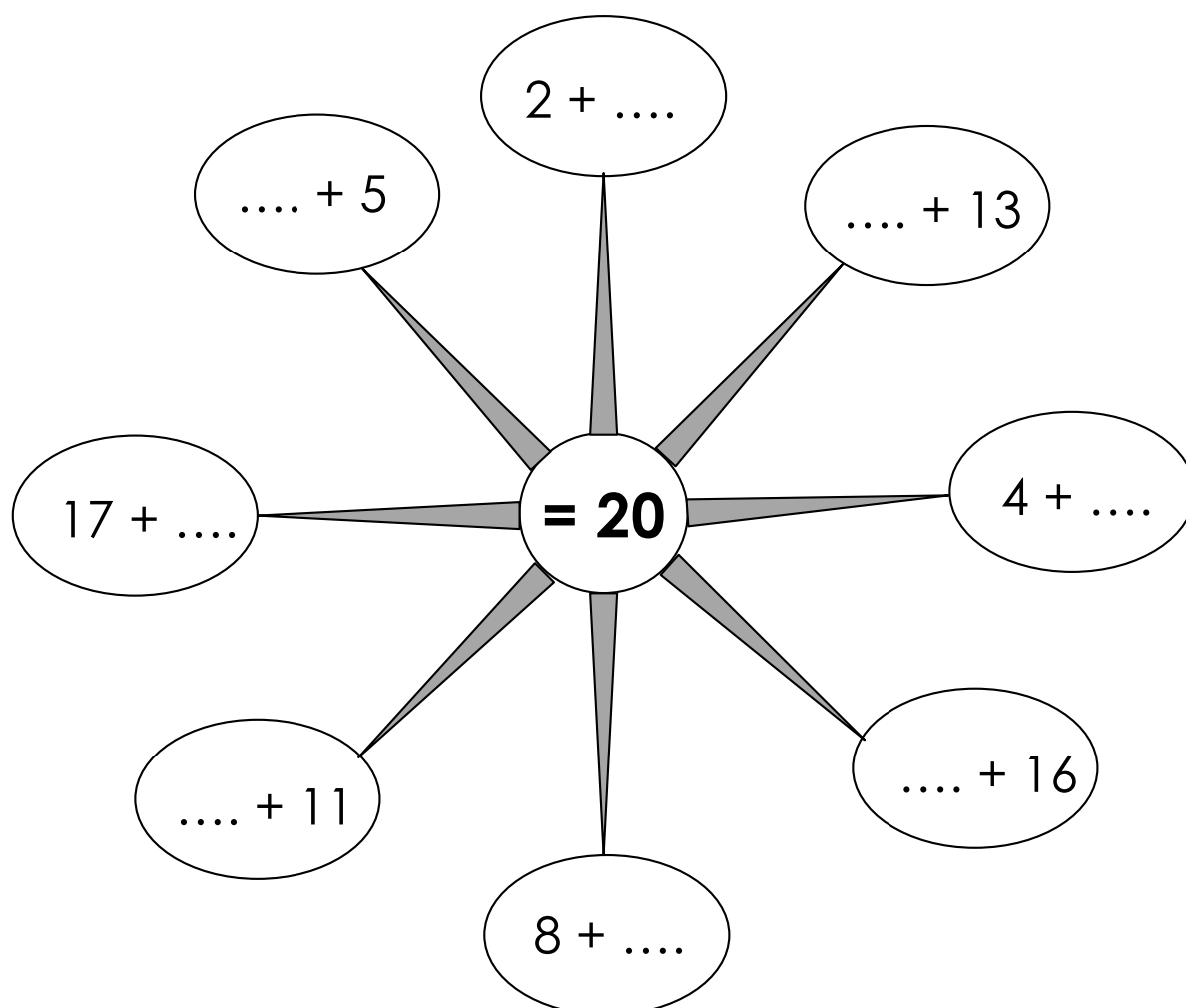


Entoure les duos de 20.

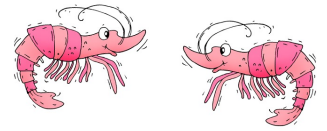
13	5	17	16	8	14
9	15	1	4	12	0
14	6	17	3	1	2
6	8	4	0	6	14
2	12	5	15	11	5
17	3	16	10	9	2



Complète la roue.



Révision



Complète les calculs le plus rapidement possible.

$2 + \dots = 20$

$12 + \dots = 20$

$7 + \dots = 20$

$17 + \dots = 20$

$0 + \dots = 20$

$10 + \dots = 20$

$6 + \dots = 20$

$16 + \dots = 20$

$1 + \dots = 20$

$11 + \dots = 20$

$3 + \dots = 20$

$13 + \dots = 20$

$9 + \dots = 20$

$19 + \dots = 20$

$\dots + 1 = 20$

$\dots + 11 = 20$

$\dots + 5 = 20$

$\dots + 15 = 20$

$\dots + 9 = 20$

$\dots + 19 = 20$

$\dots + 0 = 20$

$\dots + 10 = 20$

$\dots + 2 = 20$

$\dots + 12 = 20$

$\dots + 7 = 20$

$\dots + 17 = 20$

$\dots + 4 = 20$

$\dots + 14 = 20$