

# 1 Fiche révision mathématiques

Prénom : \_\_\_\_\_

Mila a 5 roses chez elle. Sa tante lui en donne 4.

**Combien de roses a-t-elle ?**

Calcul : \_\_\_\_\_

Réponse : \_\_\_\_\_

$7 + 2 = \dots\dots$        $9 + 1 = \dots\dots$        $5 + 0 = \dots\dots$

$5 + 3 = \dots\dots$        $4 + 1 = \dots\dots$        $5 + 2 = \dots\dots$

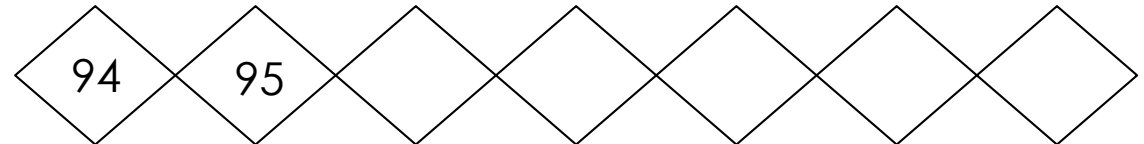
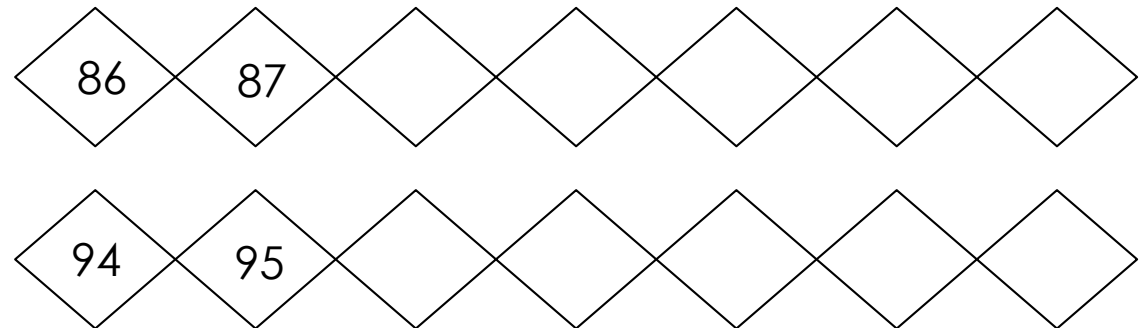
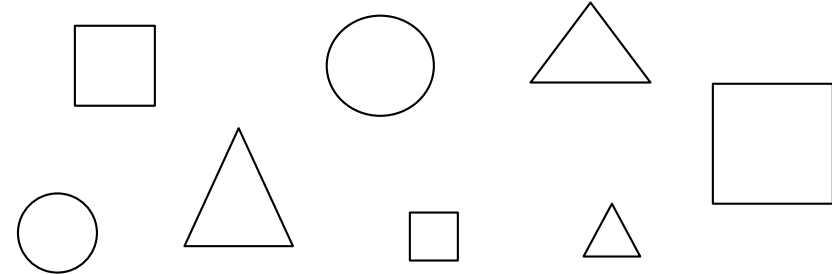
$6 + 1 = \dots\dots$        $2 + 0 = \dots\dots$        $7 + 3 = \dots\dots$

$4 + 5 = \dots\dots$        $10 + 0 = \dots\dots$        $0 + 0 = \dots\dots$

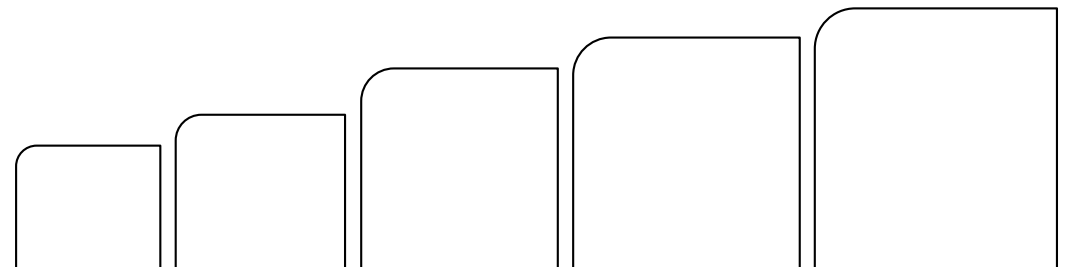
$9 + 0 = \dots\dots$        $8 + 2 = \dots\dots$        $6 + 1 = \dots\dots$

carré = vert

triangle = rouge



74 - 96 - 89 - 99 - 80



Mon chien a attrapé 12 balles hier et 5 aujourd'hui.

**Combien de souris a-t-il attrapé ?**

Calcul : \_\_\_\_\_

Réponse : \_\_\_\_\_

$10 + 2 = \dots\dots$

$10 + 8 = \dots\dots$

$10 + 3 = \dots\dots$

$10 + 4 = \dots\dots$

$10 + 1 = \dots\dots$

$10 + 6 = \dots\dots$

$10 + 5 = \dots\dots$

$10 + 9 = \dots\dots$

$10 + 0 = \dots\dots$

$10 + 2 = \dots\dots$

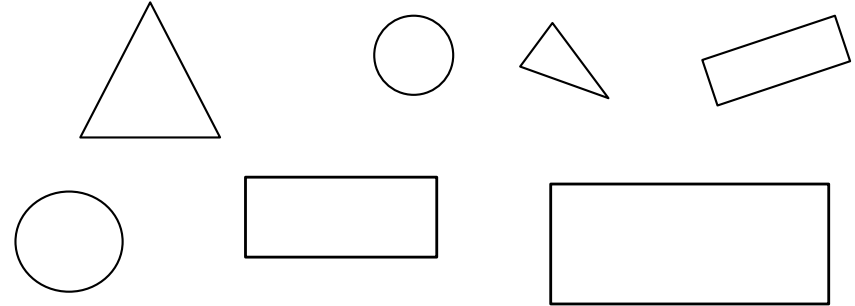
$10 + 7 = \dots\dots$

$10 + 7 = \dots\dots$


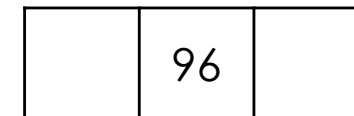
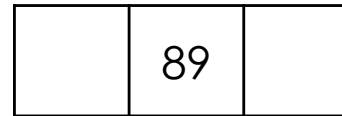
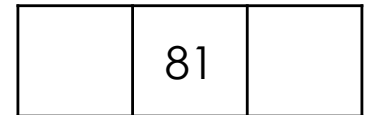
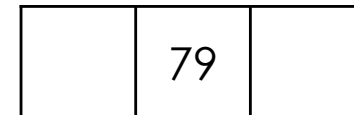
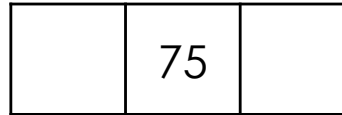
rond = jaune

rectangle = rouge

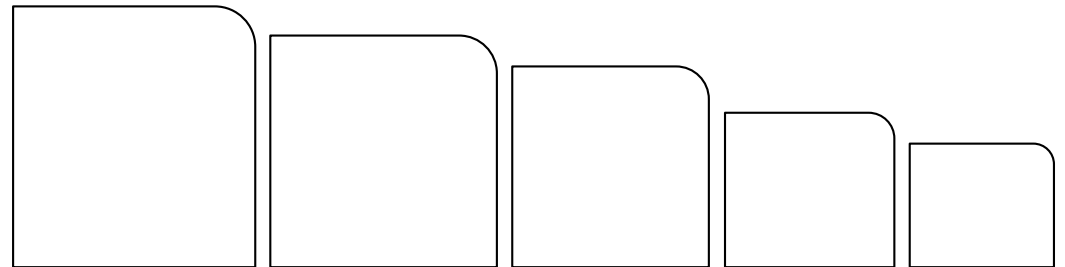
triangle = vert



**Avant - après !**



98 - 84 - 95 - 81 - 91



Mon papa a 12 bonbons. Je lui en donne 8.

**Combien de bonbons a-t-il en tout ?**

Calcul : \_\_\_\_\_

Réponse : \_\_\_\_\_

$6 + 3 = \dots\dots$

$4 + 1 = \dots\dots$

$2 + 0 = \dots\dots$

$5 + 5 = \dots\dots$

$4 + 6 = \dots\dots$

$6 + 2 = \dots\dots$

$7 + 1 = \dots\dots$

$2 + 3 = \dots\dots$

$7 + 2 = \dots\dots$

$4 + 4 = \dots\dots$

$5 + 2 = \dots\dots$

$0 + 1 = \dots\dots$

$8 + 0 = \dots\dots$

$8 + 2 = \dots\dots$

$6 + 1 = \dots\dots$

< ou >

$87 \text{ } \_\_\_\_ \text{ } 99$

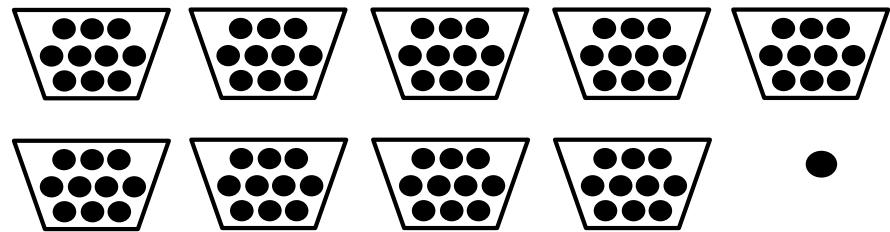
$97 \text{ } \_\_\_\_ \text{ } 95$

$93 \text{ } \_\_\_\_ \text{ } 98$

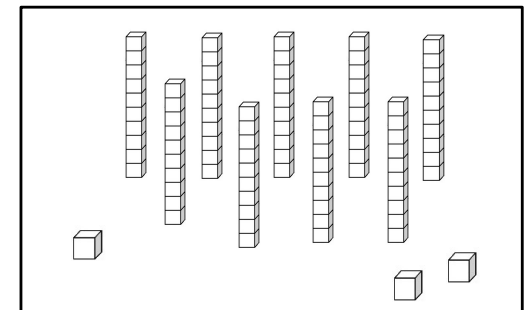
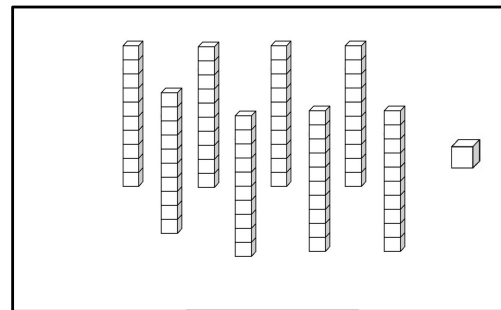
$68 \text{ } \_\_\_\_ \text{ } 54$

$88 \text{ } \_\_\_\_ \text{ } 96$

$94 \text{ } \_\_\_\_ \text{ } 86$



Il y a \_\_\_\_\_ billes.



Sara a vu 16 poissons jaunes et 11 poissons rouges.

**Combien Sara a-t-elle vu de poissons ?**

Calcul : \_\_\_\_\_

Réponse : \_\_\_\_\_

$5 + 5 = \dots\dots$

$0 + 0 = \dots\dots$

$3 + 3 = \dots\dots$

$2 + 2 = \dots\dots$


$1 + 1 = \dots\dots$

$6 + 6 = \dots\dots$

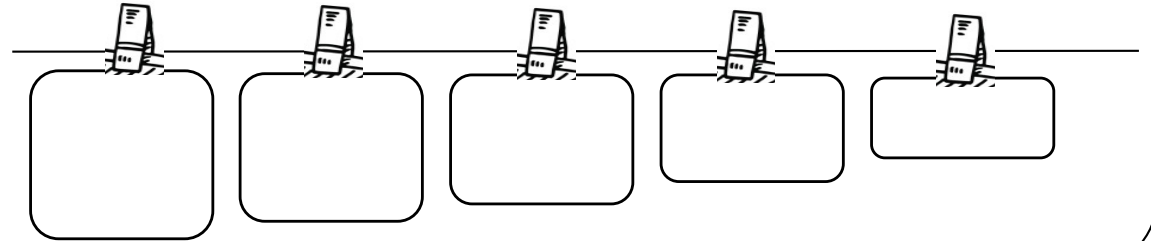
$4 + 4 = \dots\dots$

$7 + 7 = \dots\dots$

Dessine un rond à l'intérieur du carré et un triangle à droite du carré.



$85 - 78 - 89 - 98 - 95$

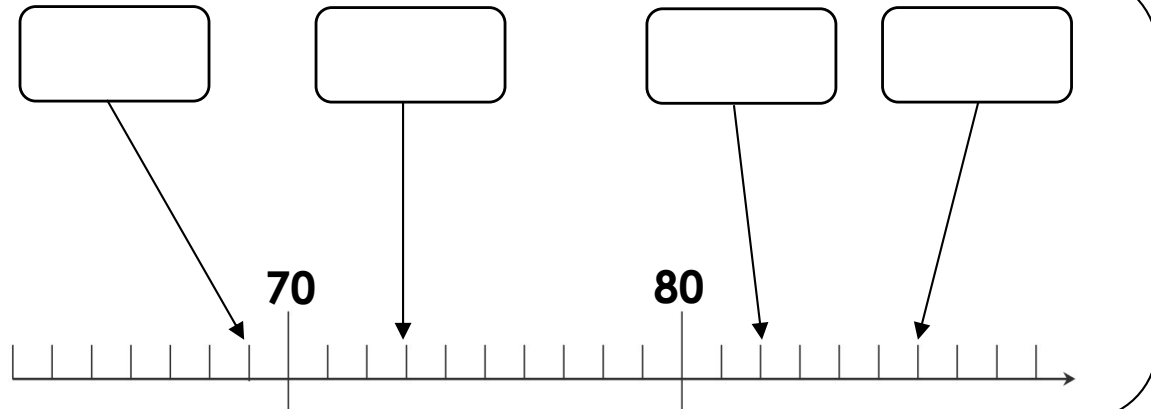


75

76

88

89



Lola a 5 pommes, 4 poires et 8 fleurs.

**Combien de fruits a-t-elle ?**

Calcul : \_\_\_\_\_

Réponse : \_\_\_\_\_

$7 + \dots = 10$

$9 + \dots = 10$

$0 + \dots = 10$

$4 + \dots = 10$

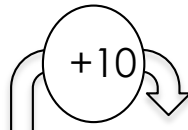

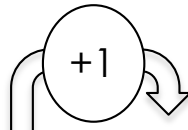

$2 + \dots = 10$

$1 + \dots = 10$


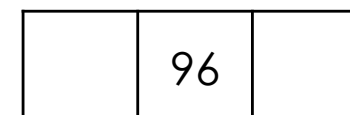
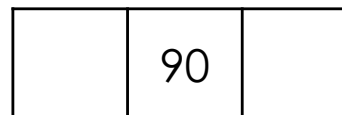
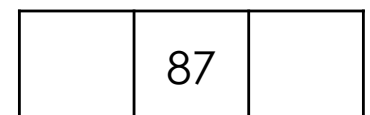
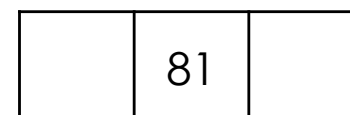
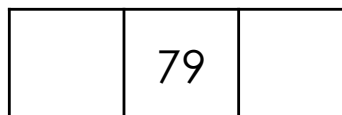
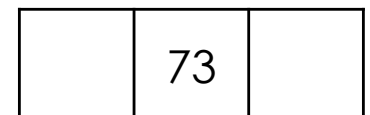
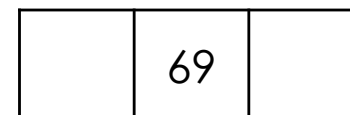
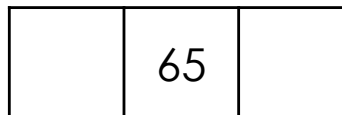
$6 + \dots = 10$

$3 + \dots = 10$

Dessine deux ronds dans le rectangle et un triangle à gauche du rectangle.



**Avant - après !**



Marie a vu 3 ours, 2 chats, 8 chiens et 9 tulipes.

**Combien d'animaux a-t-elle vu ?**

Calcul : \_\_\_\_\_

Réponse : \_\_\_\_\_

$3 + \dots = 10$

$5 + \dots = 10$

$2 + \dots = 10$

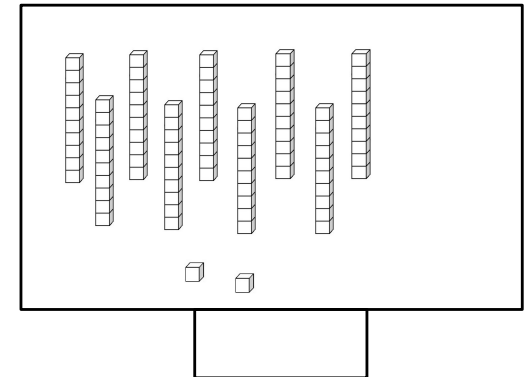
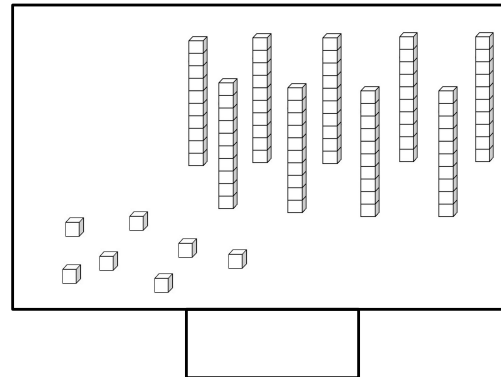


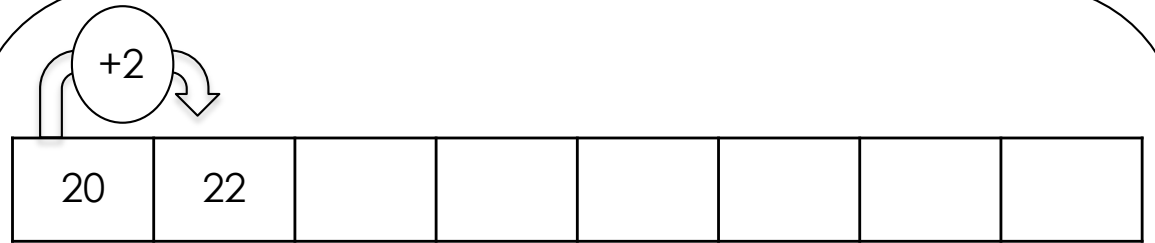
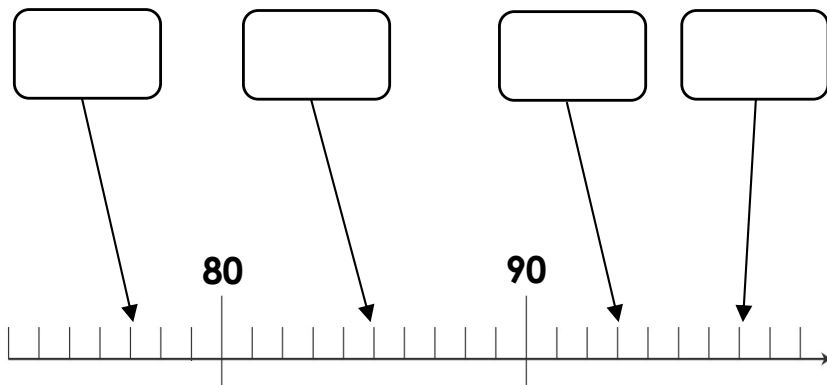
$6 + \dots = 10$

$4 + \dots = 10$

$1 + \dots = 10$

$8 + \dots = 10$

$0 + \dots = 10$




Tu as acheté 8 carottes, 9 concombres et 6 courgettes. **Combien de légumes as-tu acheté ?**

Calcul : \_\_\_\_\_

Réponse : \_\_\_\_\_

93 - 87 - 91 - 99 - 93



$10 + 6 = \dots\dots\dots$

$9 + 10 = \dots\dots\dots$

$10 + 2 = \dots\dots\dots$

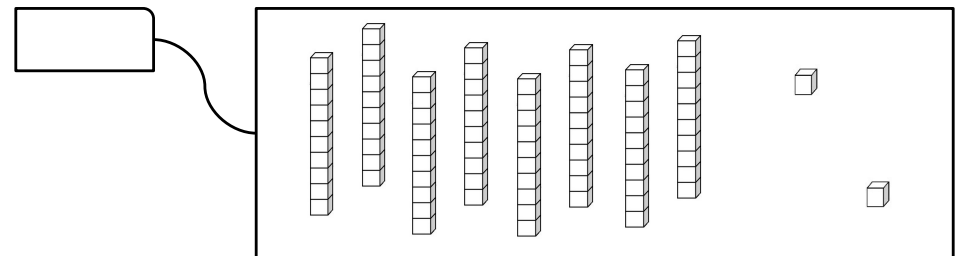
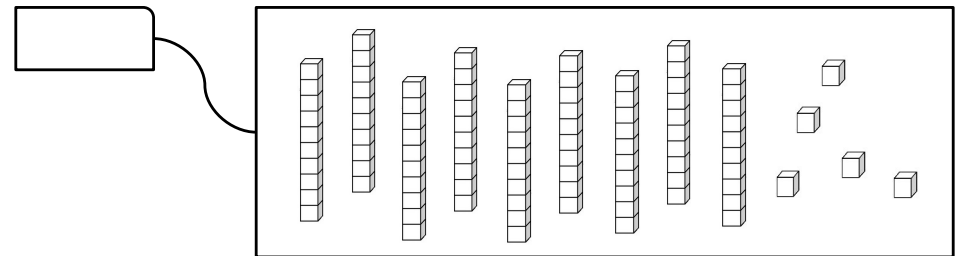
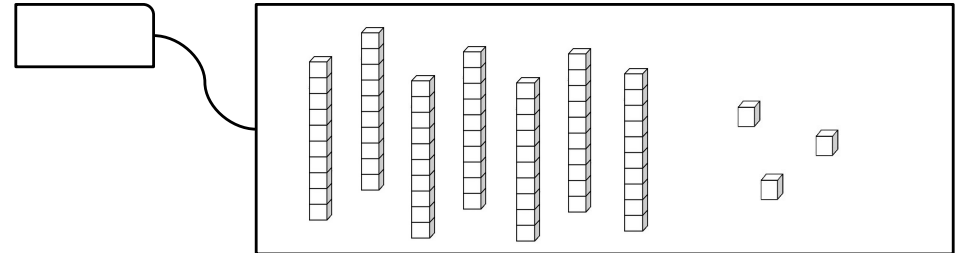
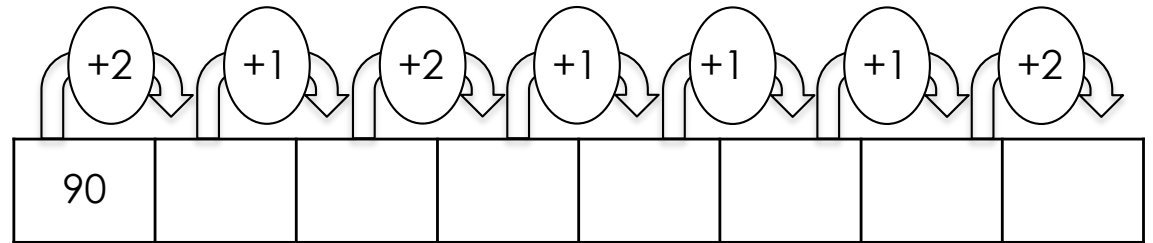
$4 + 10 = \dots\dots\dots$

$10 + 3 = \dots\dots\dots$

$1 + 10 = \dots\dots\dots$

$10 + 5 = \dots\dots\dots$

$8 + 10 = \dots\dots\dots$



avant	nombre	après
	59	
	65	
	71	
	80	
	99	

- Dessine un rond autour de l'étoile.
- Dessine un triangle sur le rond.
- Dessine un carré à droite du rond.
- Dessine un rectangle sous le rond.



$10 + 30 = \dots\dots\dots$

$10 + 80 = \dots\dots\dots$

$10 + 60 = \dots\dots\dots$

$10 + 70 = \dots\dots\dots$

$10 + 40 = \dots\dots\dots$

$10 + 90 = \dots\dots\dots$

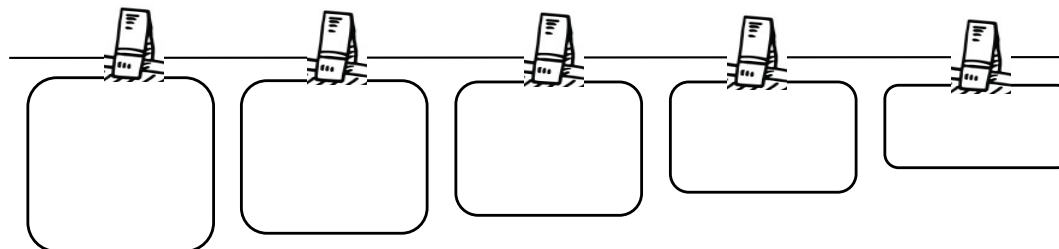
$10 + 10 = \dots\dots\dots$

$10 + 0 = \dots\dots\dots$


$10 + 20 = \dots\dots\dots$

$10 + 50 = \dots\dots\dots$

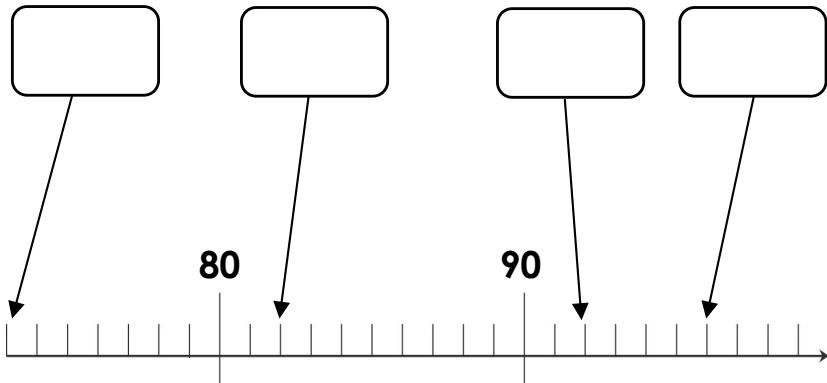
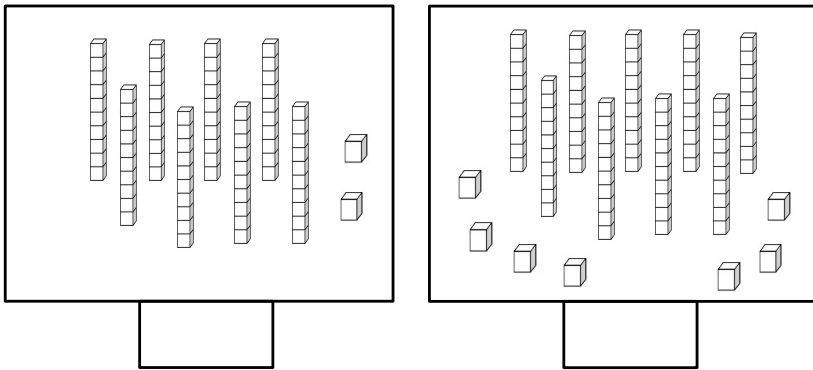
99 - 94 - 97 - 91 - 90







Il y a \_\_\_\_\_ billes.



< ou >

89 \_\_\_\_\_ 98




96 \_\_\_\_\_ 92

90 \_\_\_\_\_ 97

66 \_\_\_\_\_ 55

78 \_\_\_\_\_ 86

96 \_\_\_\_\_ 86



# 10 Fiche révision mathématiques

Prénom : \_\_\_\_\_

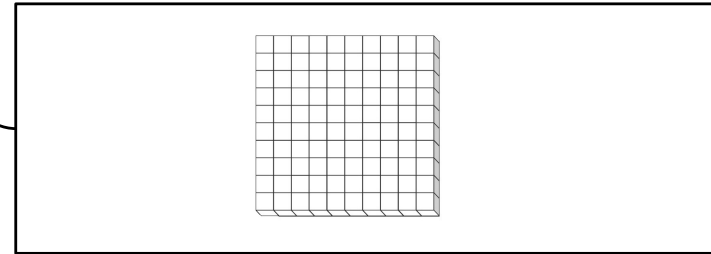
Mon frère a 8 pulls, 3 pantalons, 2 jaquettes et 5 casquettes. **Combien de choses a-t-il en tout ?**

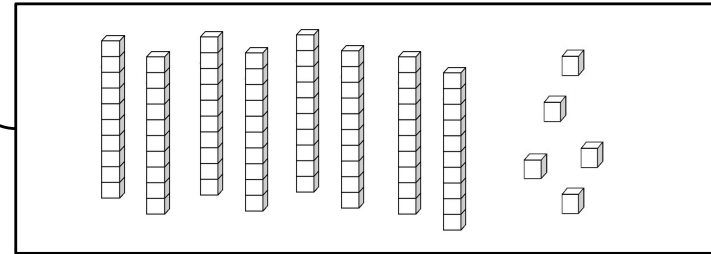
Calcul : \_\_\_\_\_

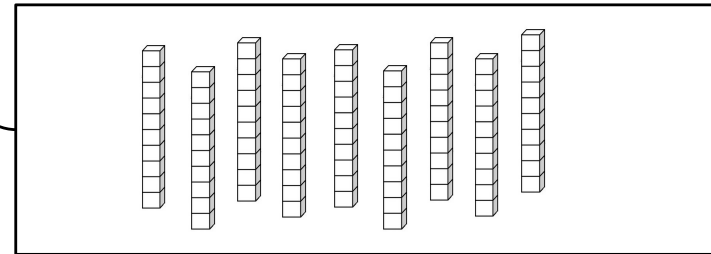
Réponse : \_\_\_\_\_

81 - 98 - 88 - 96 - 99

- |                  |                  |
|------------------|------------------|
| $2 + \dots = 10$ | $1 + \dots = 10$ |
| $7 + \dots = 10$ | $3 + \dots = 10$ |
| $0 + \dots = 10$ | $9 + \dots = 10$ |
| $6 + \dots = 10$ | $4 + \dots = 10$ |







71	72						
83	84						
90	91						